



1




Additionne.




a) $13 + 5 = \square$




b) $11 + 6 = \square$




c) $14 + 4 = \square$




d) $8 + 12 = \square$



e) $3 + 15 = \square$

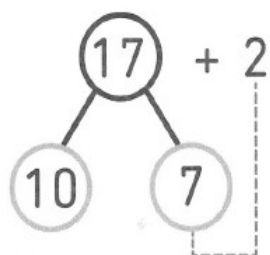


f) $4 + 13 = \square$



2  Observe l'exemple puis complète.

Exemple



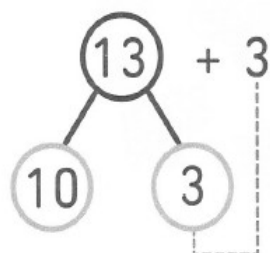
$$7 + 2 = 9$$

$$10 + 9 = 19$$

Donc :

$$17 + 2 = 19$$

a)



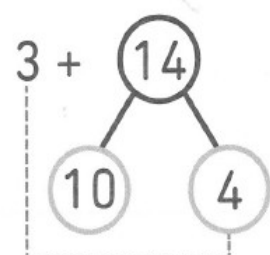
$$3 + 3 = \square$$

$$10 + \square = \square$$

Donc :

$$13 + 3 = \square$$

b)



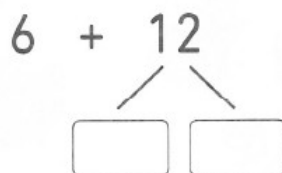
$$3 + 4 = \square$$

$$10 + \square = \square$$

Donc :

$$3 + 14 = \square$$

c) $6 + 12 = \square$



d) $5 + 14 = \square$

