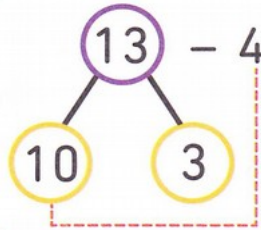
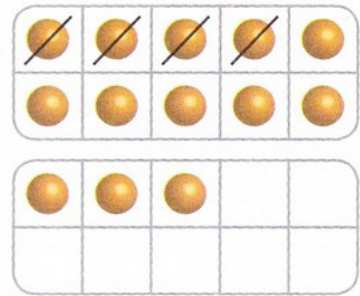


.....

J'observe

Soustrais 4 de 13.

Décompose d'abord
13 en 10 et 3
puis soustrais 4 de 10.



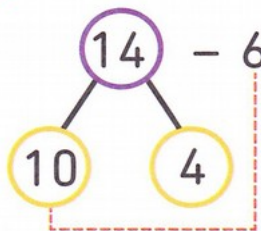
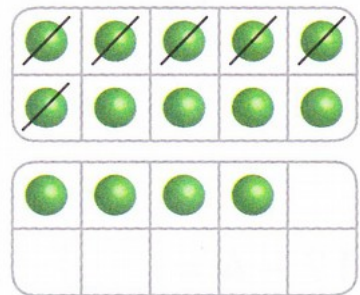
$$10 - 4 = 6$$

$$6 + 3 = 9$$

$$13 - 4 = 9$$

Soustrais 6 de 14.

Soustrais 6 de 10.




$$10 - 6 = 4$$

$$4 + 4 = 8$$

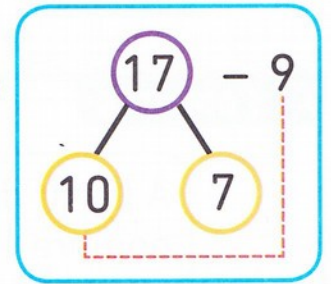
$$14 - 6 = 8$$

1 Soustrais en décomposant le plus grand nombre.

$17 - 9 = \square$




Soustrais 9 de 10.




2 Complète les égalités.

a) $12 - 5 = \square$



$$\begin{array}{r} 12 - 5 \\ \swarrow \quad \searrow \\ \square \quad \square \end{array}$$

b) $15 - 7 = \square$



$$\begin{array}{r} 15 - 7 \\ \swarrow \quad \searrow \\ \square \quad \square \end{array}$$

3 Complète. Explique tes réponses avec des mots ou un dessin.

a) $16 - 8 = \square$

b) est le double de .

c) est la moitié de .

