

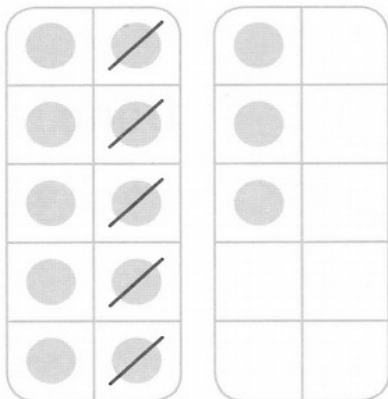
Séance

60


Soustrayons en décomposant le plus grand nombre (2)

1 ✂ Barre le bon nombre de points
✍ puis complète la soustraction.


a) $13 - 5 = \square$




b) $14 - 7 = \square$




c) $15 - 6 = \square$




d) $16 - 7 = \square$



e) $17 - 8 = \square$

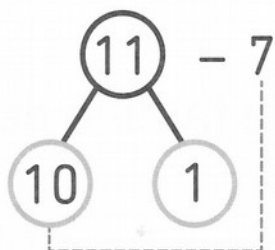


f) $18 - 9 = \square$



2  Observe l'exemple puis complète.

Exemple



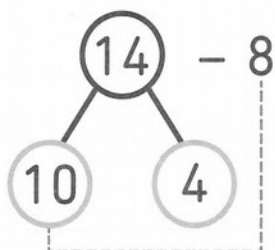
$$10 - 7 = 3$$

$$1 + 3 = 4$$

Donc :

$$11 - 7 = 4$$

a)



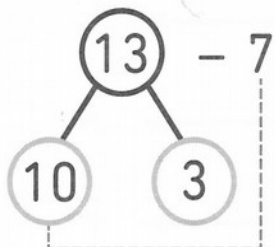
$$10 - 8 = \square$$

$$4 + \square = \square$$

Donc :

$$14 - 8 = \square$$

b)



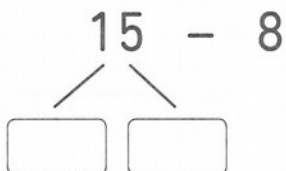
$$10 - 7 = \square$$

$$3 + \square = \square$$

Donc :

$$13 - 7 = \square$$

c) $15 - 8 = \square$



d) $17 - 9 = \square$

