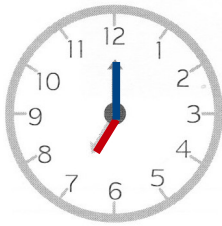


Séance

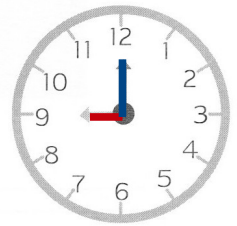
109

Lisons l'heure (1)

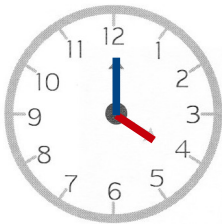
1  Relie chaque horloge à l'heure correspondante.



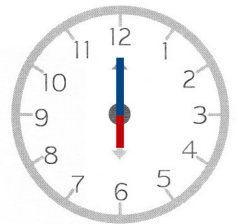
● 1 heure ●



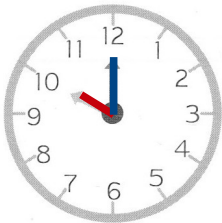
● 3 heures ●



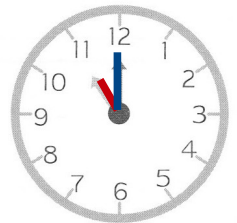
● 4 heures ●



● 6 heures ●

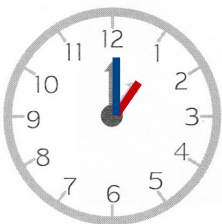


● 7 heures ●




● 9 heures ●


● 10 heures ●




● 11 heures ●




2 ✎ Écris l'heure indiquée sur chaque horloge.




il est



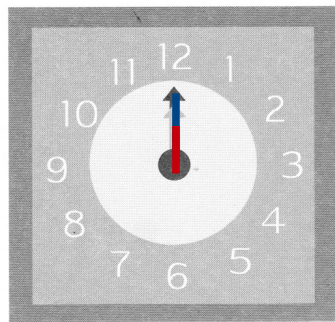
il est




il est



il est



il est



il est